

Chap 1: The Earth and the Graticule

Q I Fill in the Blanks

1. The _____ is located at one and the same place and that is Agra.
2. The _____ bisects the earth into north and south parts.

QII Match the Following

1. Prime Meridian _____ a. 180°
2. Meridian _____ b. 0°

QIII Answer the following questions

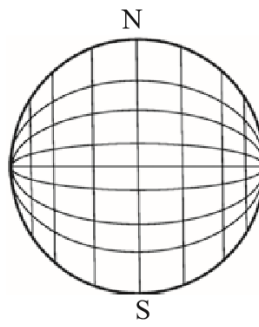
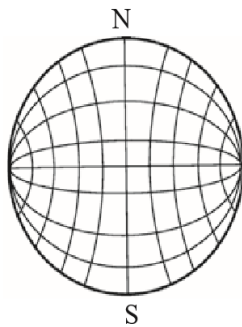
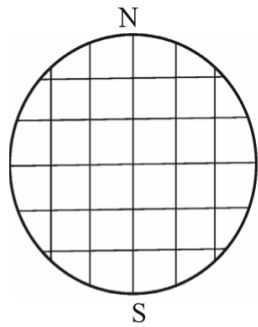
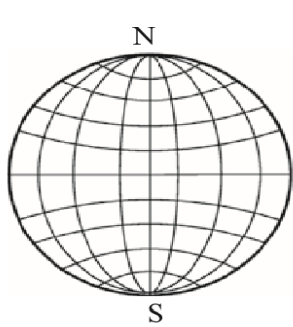
1. Name the two Hemispheres.

Ans _____

- 2.. What is Graticule?

Ans _____

D] Find out the correct graticule out of the following and put a tick mark \checkmark against.



Q VI Draw the diagram of a graticule.

